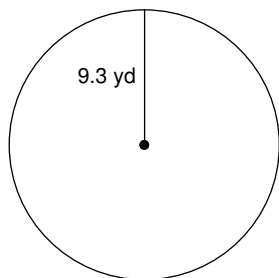


## Review Sheet: Circles

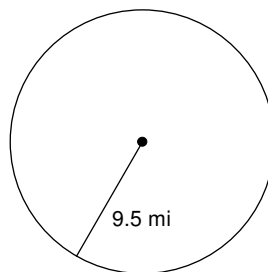
Date \_\_\_\_\_

**Find the circumference of each circle. Round your answer to the nearest tenth.**

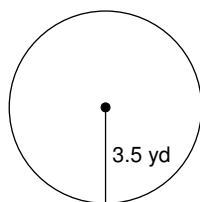
1)



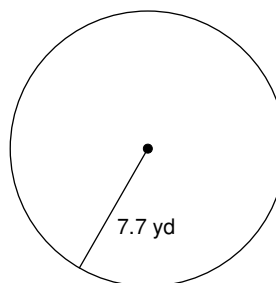
2)



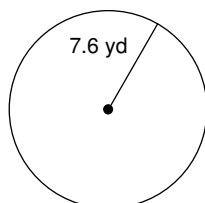
3)



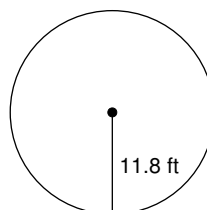
4)



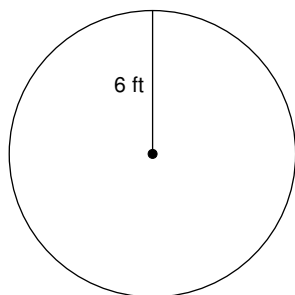
5)



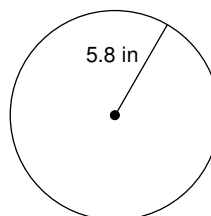
6)



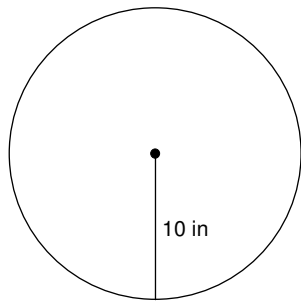
7)



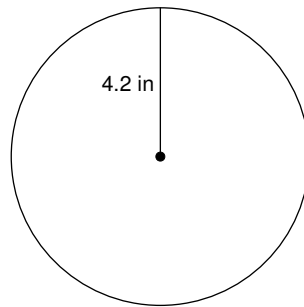
8)



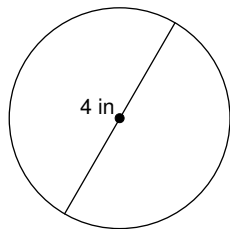
9)



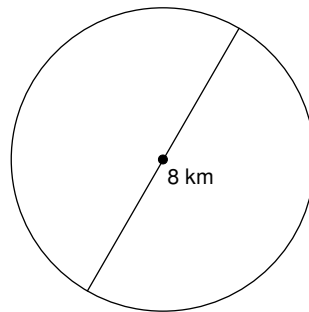
10)



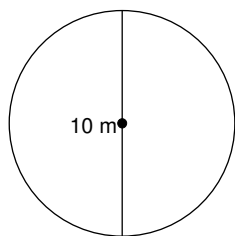
11)



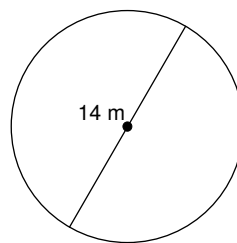
12)



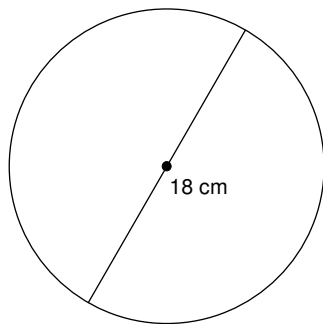
13)



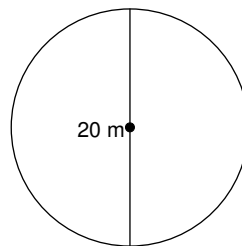
14)



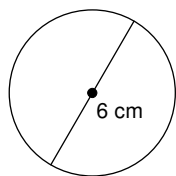
15)



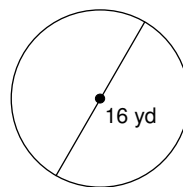
16)



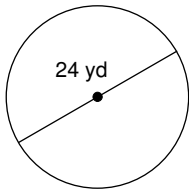
17)



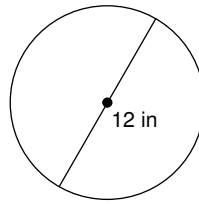
18)



19)

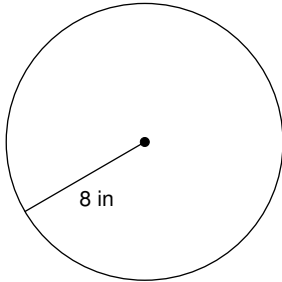


20)

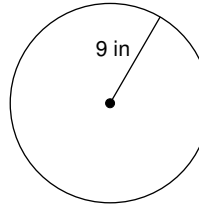


**Find the area of each. Round your answer to the nearest tenth.**

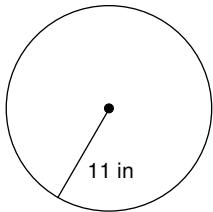
21)



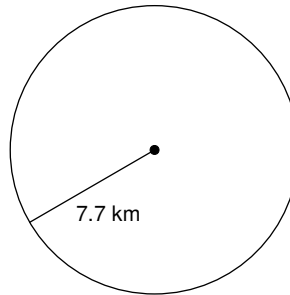
22)



23)



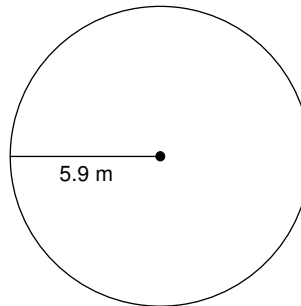
24)



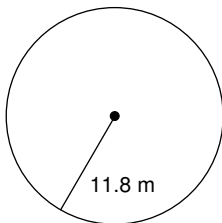
25)



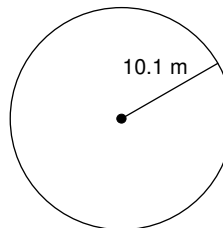
26)



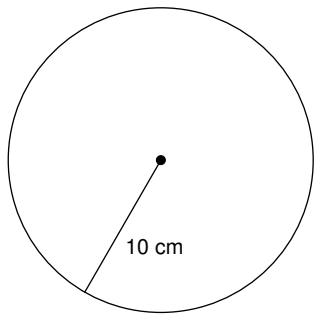
27)



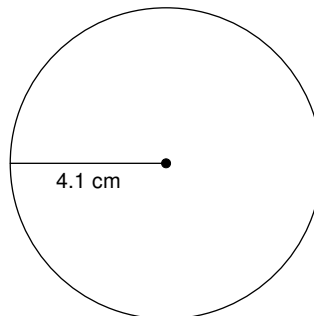
28)



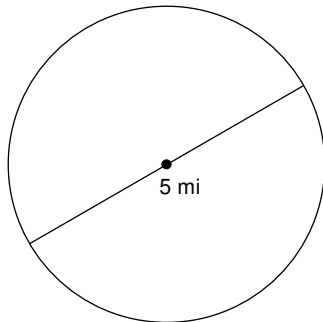
29)



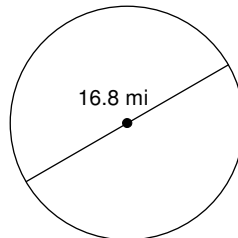
30)



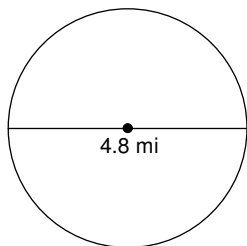
31)



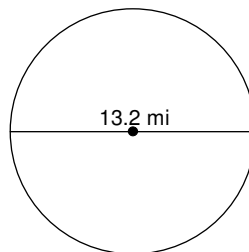
32)



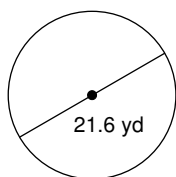
33)



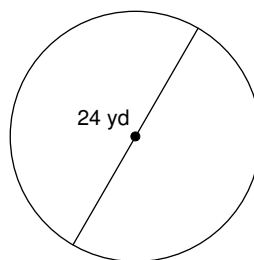
34)



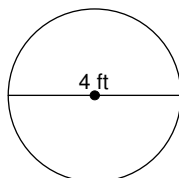
35)



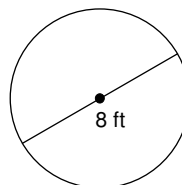
36)



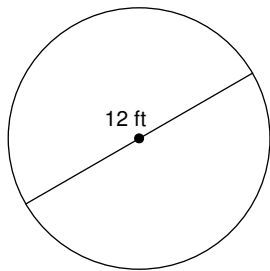
37)



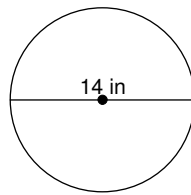
38)



39)



40)



## Answers to Review Sheet: Circles (ID: 1)

- |                           |                           |                           |
|---------------------------|---------------------------|---------------------------|
| 1) 58.4 yd                | 2) 59.7 mi                | 3) 22 yd                  |
| 4) 48.4 yd                | 5) 47.8 yd                | 6) 74.1 ft                |
| 7) 37.7 ft                | 8) 36.4 in                | 9) 62.8 in                |
| 10) 26.4 in               | 11) 12.6 in               | 12) 25.1 km               |
| 13) 31.4 m                | 14) 44 m                  | 15) 56.5 cm               |
| 16) 62.8 m                | 17) 18.8 cm               | 18) 50.3 yd               |
| 19) 75.4 yd               | 20) 37.7 in               | 21) 201.1 in <sup>2</sup> |
| 22) 254.5 in <sup>2</sup> | 23) 380.1 in <sup>2</sup> | 24) 186.3 km <sup>2</sup> |
| 25) 444.9 km <sup>2</sup> | 26) 109.4 m <sup>2</sup>  | 27) 437.4 m <sup>2</sup>  |
| 28) 320.5 m <sup>2</sup>  | 29) 314.2 cm <sup>2</sup> | 30) 52.8 cm <sup>2</sup>  |
| 31) 19.6 mi <sup>2</sup>  | 32) 221.7 mi <sup>2</sup> | 33) 18.1 mi <sup>2</sup>  |
| 34) 136.8 mi <sup>2</sup> | 35) 366.4 yd <sup>2</sup> | 36) 452.4 yd <sup>2</sup> |
| 37) 12.6 ft <sup>2</sup>  | 38) 50.3 ft <sup>2</sup>  | 39) 113.1 ft <sup>2</sup> |
| 40) 153.9 in <sup>2</sup> |                           |                           |